

# Independent questions:

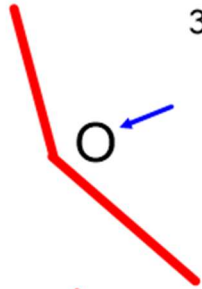
Label each image as having a right angle, acute angle or obtuse angle.



1.



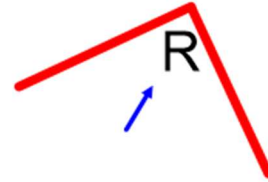
2.



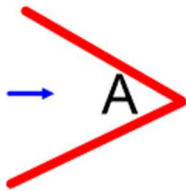
3.



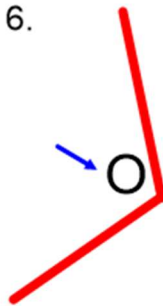
4.



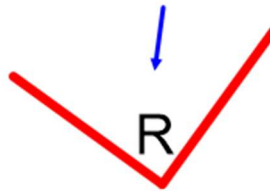
5.



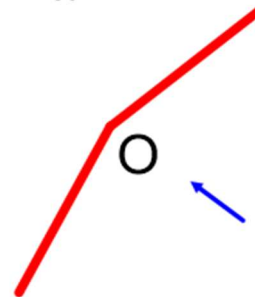
6.



7.

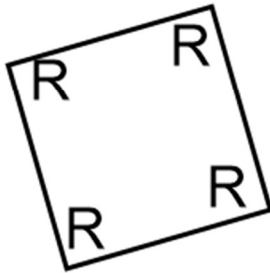


8.

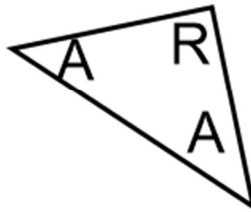


Label the angles in each shape (R, A, O).

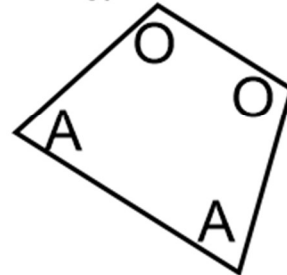
1.



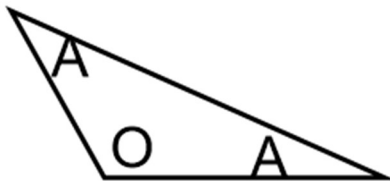
2.



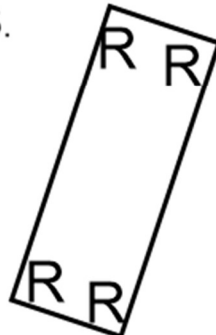
3.



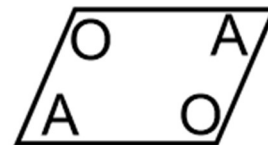
4.



5.



6.



## Challenge:

Teddy describes a shape.

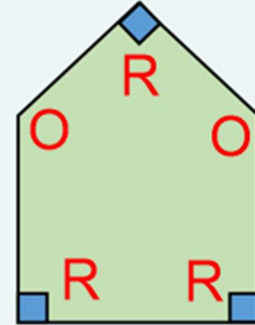


My shape has 3 right angles and 2 obtuse angles.

What could Jack's shape look like?

Describe a shape in terms of its angles for a friend to draw.

Possible answer:



↓  
We draw this square to show a right angle.