

Units of time

Complete the conversions:

1 year = _____ months

_____ years = 24 months

_____ years = 60 months

2.5 years = _____ months

3 years and 2 months = _____ months

_____ years _____ months = 75 months

*Days, weeks,
months, years*

Complete the table.

Days	Weeks / Weeks and Days
42 days	
	5 weeks and 5 days
	10 weeks and 5 days
100 days	

Can 21 days be written in weeks?

Can 25 days be written in weeks?

Explain your answers.

Units of time

Hours, minutes,
seconds

Complete these conversions:




$\frac{1}{3}$ hour = _____ minutes

1.5 minute = _____ seconds

3 hours and 24 minutes = _____ minutes

_____ hours = 240 minutes

Three children are running a race.

- Whitney finishes the race in 3 minutes 5 seconds. 
- Eva finishes the race in 192 seconds. 
- Alex finishes the race in 2 minutes and 82 seconds. 

Who finishes the race first?