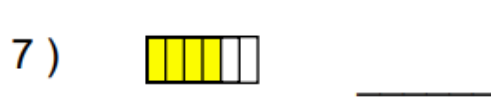
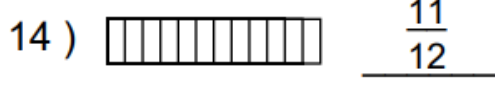
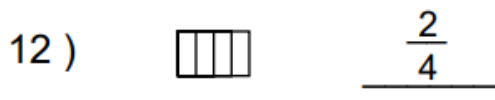


What fraction of each shape has been shaded?

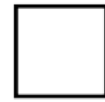


Shade each shape using the given fraction:



Challenge

Jack says one third of the shape has been shaded. Explain why he is wrong.



2 marks

Each person says they have shaded two thirds of their shape. Explain if each person is right or wrong.



Ross



Jane



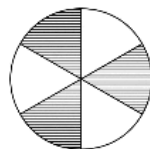
Lucy



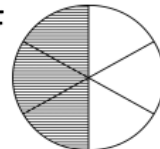
Chris

Steve and Daisy think they have shaded three sixths.

Steve:



Daisy:



Who is right? Explain your answer.

