



- 1) Sort these activities into which ones you would do in the morning and which ones you would do in the afternoon. Which activities could go in both groups?

| Morning | Afternoon |
|---------|-----------|
| | |

go to an afterschool club

have a shower

eat breakfast

walk home from school

brush my teeth

walk to school

- 2) Sort these lessons into order from earliest to latest.

Maths

9:45 a.m.

Spanish

11:20 a.m.

earliest

Assembly

12:15 p.m.

PE

1:35 p.m.

Art

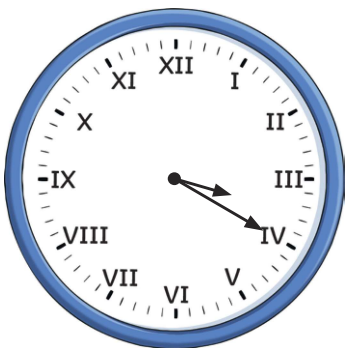
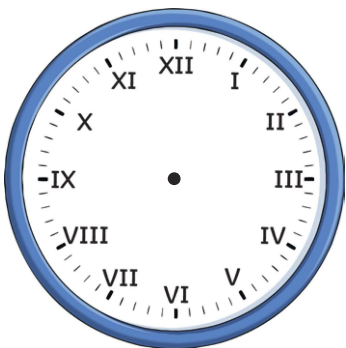
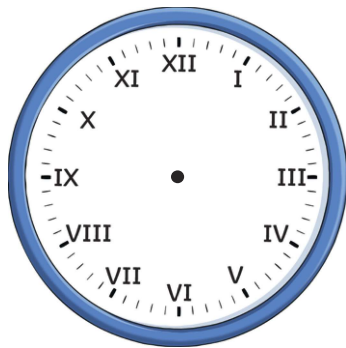
2:20 p.m.

Spelling

8:55 a.m.

latest

- 3) Show these times on both analogue and digital clocks.
One has been done for you.

| 20 past 3 in the afternoon | 6 o'clock in the morning | 10 minutes past 11 in the evening |
|---|---|---|
|  |  |  |
| 3:20 p.m. | | |